


# Earthquake Location

regional triangulation with real data

---

Anne M Ortiz  
Tammy K Bravo



© 2005 Science Education Solutions  
Los Alamos Research Park  
Los Alamos, NM 87544

<http://www.scieds.com/spinet>  
[spinet@scieds.com](mailto:spinet@scieds.com)



### Why Triangulation?

There are many methods used for earthquake location.

Triangulation is a simple method, but fundamental in identifying the necessary steps in any location procedure: identifying arrivals and estimating the distance to the earthquake source.

### What skills will students build?

- Reading graphical information
- Recording scientific data
- Mathematical computation (Subtraction/Multiplication/Estimation)
- Plotting graphical data (including using compass)
- Geographic Map reading (Latitude/Longitude Interpolation)

### Materials List

- Master Map with topography - use this map on an overhead projector to lead the class in an example/solution
- Master Map with Location Key
- Student Worksheet (pg 6) - provide a copy to each student
- Station Seismograms (GLA, PCAZ, TUC, WUAZ) - provide copies of **at least three unique seismograms** to each student (group of students)
- Compass - for each student (group of students)

### Seismic Location Background

**What does *regional triangulation* mean?** This is best described by breaking the two words apart. Regional identifies the proximity of the earthquake to the station, specifically within 100 km to 600 km for this exercise. This allows us to use simplifications to determine the distance to an event from wave arrival times, as discussed below. Triangulation is a method of location which uses a minimum of three stations to produce distance circle arcs which intersect at the approximate epicenter of an event.

**Why do we use  $(S-P) \times 8$  ?** In earthquake location the time it takes for a seismic wave to arrive at a given station can be broken into two parts; the time it takes to travel horizontally and the time it takes to travel vertically. By only using earthquakes in close proximity to the station (regional 100-600km) the waves do not penetrate deep into Earth and we can ignore the vertical segment of the travel time and focus on the horizontal segment.

### About this Event and the Geologic Setting

This earthquake occurred March 2, 2005 at 11:12:58 GMT (4:12 AM local time) in Northern Arizona approximately 40 km (25 miles) SSW of Winslow, Arizona. It was a shallow event, only 5 km deep, with a magnitude of 5.1 Mw. This event is part of a series of 10 events that began 1/28/2005, of which this is the largest event.

Arizona is located in the Basin and Range Province, an area of tectonic extension characterized by mountains and valleys. This region traverses many western United States including AZ, NV, NM, and UT.

### Seismic Stations Featured in this Activity

GLA - Glamis is three component instrument operated as part of the CalTech Regional Seismic Network

PCAZ - Phoenix Country Day School Arizona operates a vertical component AS-1 seismometer in a 5th grade classroom.

TUC - Tucson Arizona is a three component instrument operated by the University of Arizona.

WUAZ - Wupatki Arizona is a three component instrument located on Wupatki National Monument, near Sunset Crater Volcano.

In seismograms from regional events we observe two prominent arrivals, P and S. The separation in time between these arrivals is the basis for the equation  $(S - P) \times 8$ .

$$(S - P) = D / V_p - D / V_s \quad (1)$$

where S and P are arrival times, D is the horizontal distance in kilometers to the event and  $V_p$  and  $V_s$  are seismic velocities for the P-wave and S-wave respectively.

In Earth we often use an approximation that relates  $V_p$  and  $V_s$ .

$$V_s = V_p / \sqrt{3} \quad (2)$$

Substituting Equation 2 into Equation 1 and rearranging yields,

$$D = \frac{(S-P) \times V_p}{(\sqrt{3} - 1)}$$

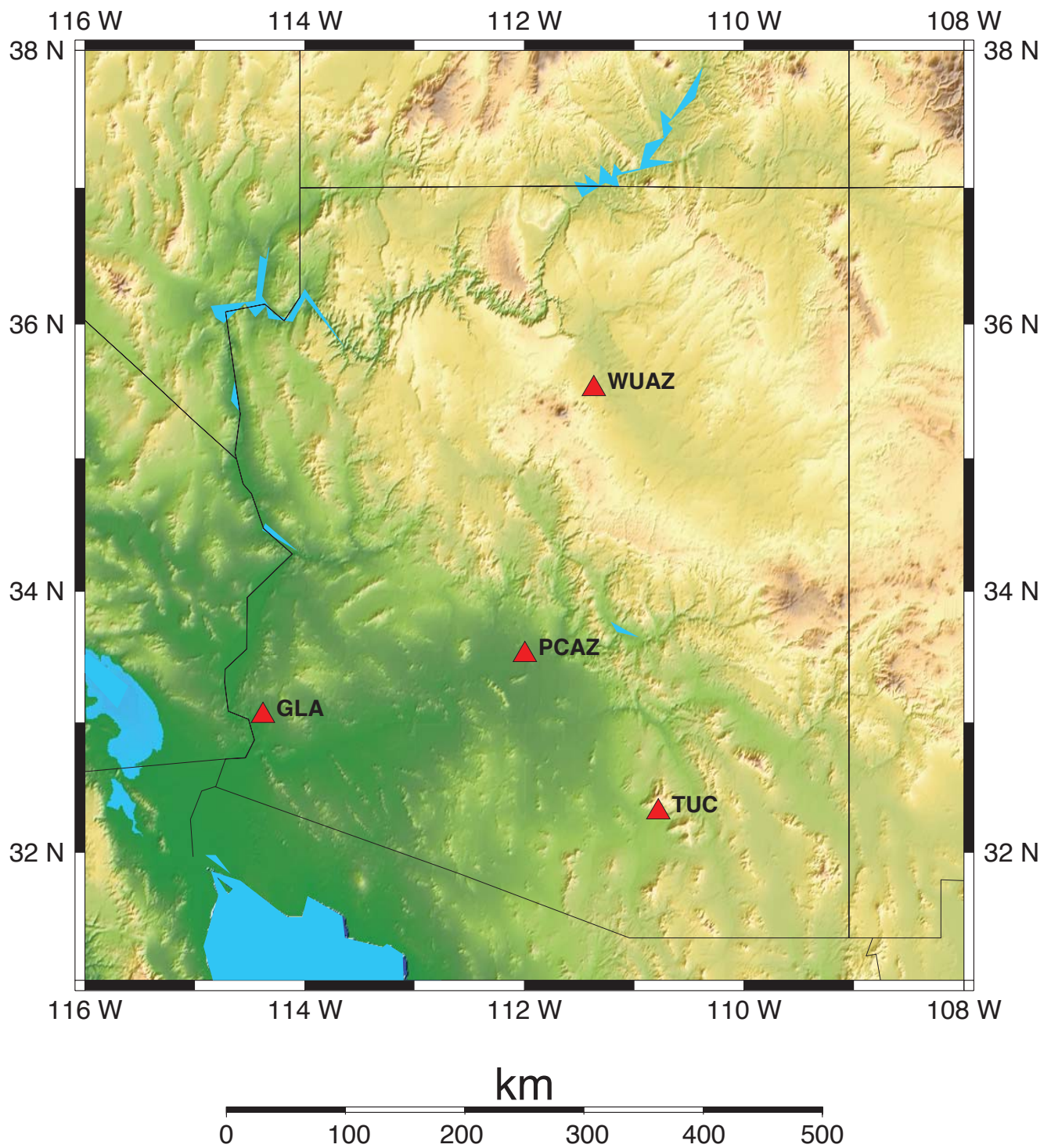
Since our seismic waves do not travel deep they remain in the crust where P-waves travel at a velocity of approximately 5.7-6.0 km/s. Substituting this value for  $V_p$  and dividing the  $(\sqrt{3} - 1)$  reveals

$$D \text{ (km)} = (S - P) \times 8 \text{ km/s}$$

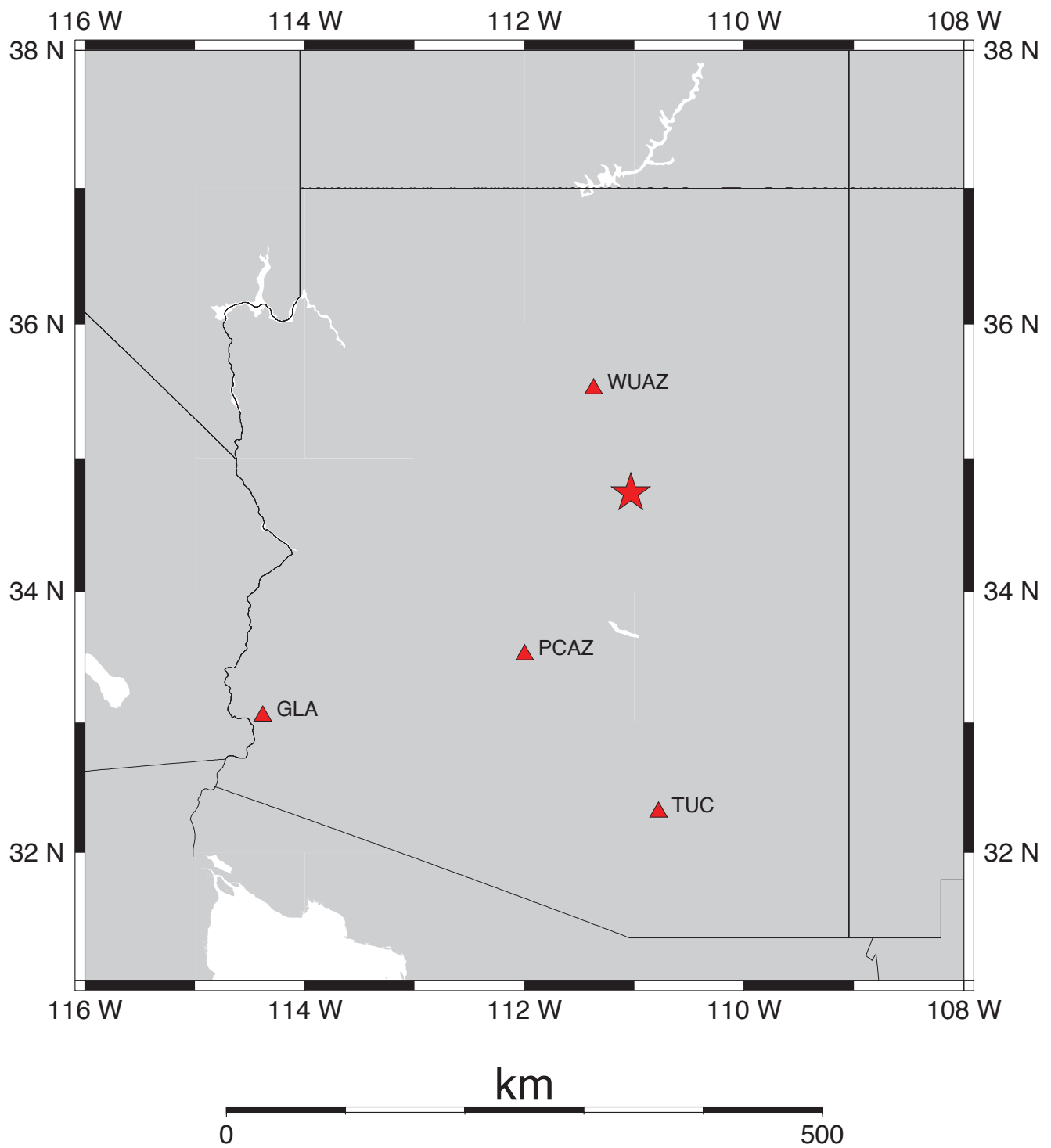
### Extensions / Assessment

- Test your skills online with the Virtual Earthquake! Complete a triangulation and magnitude determination exercise to receive a certificate of achievement.  
<http://www.sciencecourseware.com/VirtualEarthquake/>
- Use one of the other SpiNet triangulation event classroom sets to evaluate the skills learned in this activity.  
<http://www.scieds.com/spinet/activities/triangulation.html>

## Event Location - Regional Triangulation

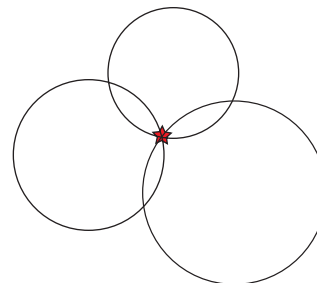


## Event Location - Regional Triangulation



### Earthquake Location 101

There are several methods used to locate earthquakes, triangulation is one that uses distance information from 3 or more stations to uniquely locate an earthquake. On a map, circles are drawn around each seismic station. The radius of each circle is scaled to the estimated distance between a station and the earthquake. A minimum of three (3) circles will share one unique intersection that approximates the *epicenter*.



*epicenter* - is the point on Earth's surface directly above the point where seismic rupture begins

### Locate the Quake

#### Repeat Steps 1-3 for each station/seismogram

##### Step 1 - Pick the Waves

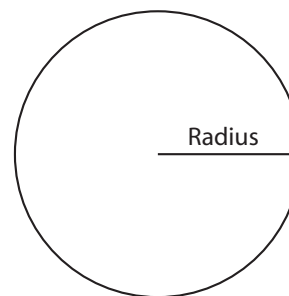
- Record the Station Code (found in the upper right corner of the seismogram) in the **Station Code** column of Table 1.
- Determine the time of the P-wave arrival. Record it in the **P Arrival** column of Table 1.
- Determine the time of the S-wave arrival. Record it in the **S Arrival** column of Table 1.

##### Step 2 - Go the Distance

- Calculate the **S-P (seconds)** time by subtracting the P Arrival time from the S Arrival time. Record the answer in Table 1.
- Calculate and record the distance (km) from the station to the earthquake by multiplying the **S-P** column value by 8 km/s.

##### Step 3 - Ring Around the Seismometer

- Locate the scale at the bottom of the worksheet map. Using a compass, set the distance between the point and the pencil to the distance determined for the station. [Setting the compass will require estimating]
- Using the map, place the point of the compass on the matching station triangle.
- **Draw a circle around the station**, the circle has a *radius* equal to the distance to the event. The epicenter of the earthquake is somewhere on the edge of the circle.



*radius* - is the distance from the center of the circle to its outer edge

##### Step 4 - Find the Epicenter (after repeating Steps 1-3 for each station)

- Your circles should intersect at one point on the map, the epicenter. Using the map, **estimate** the **Latitude** and **Longitude** of the earthquake and record it on the worksheet directly above the map.

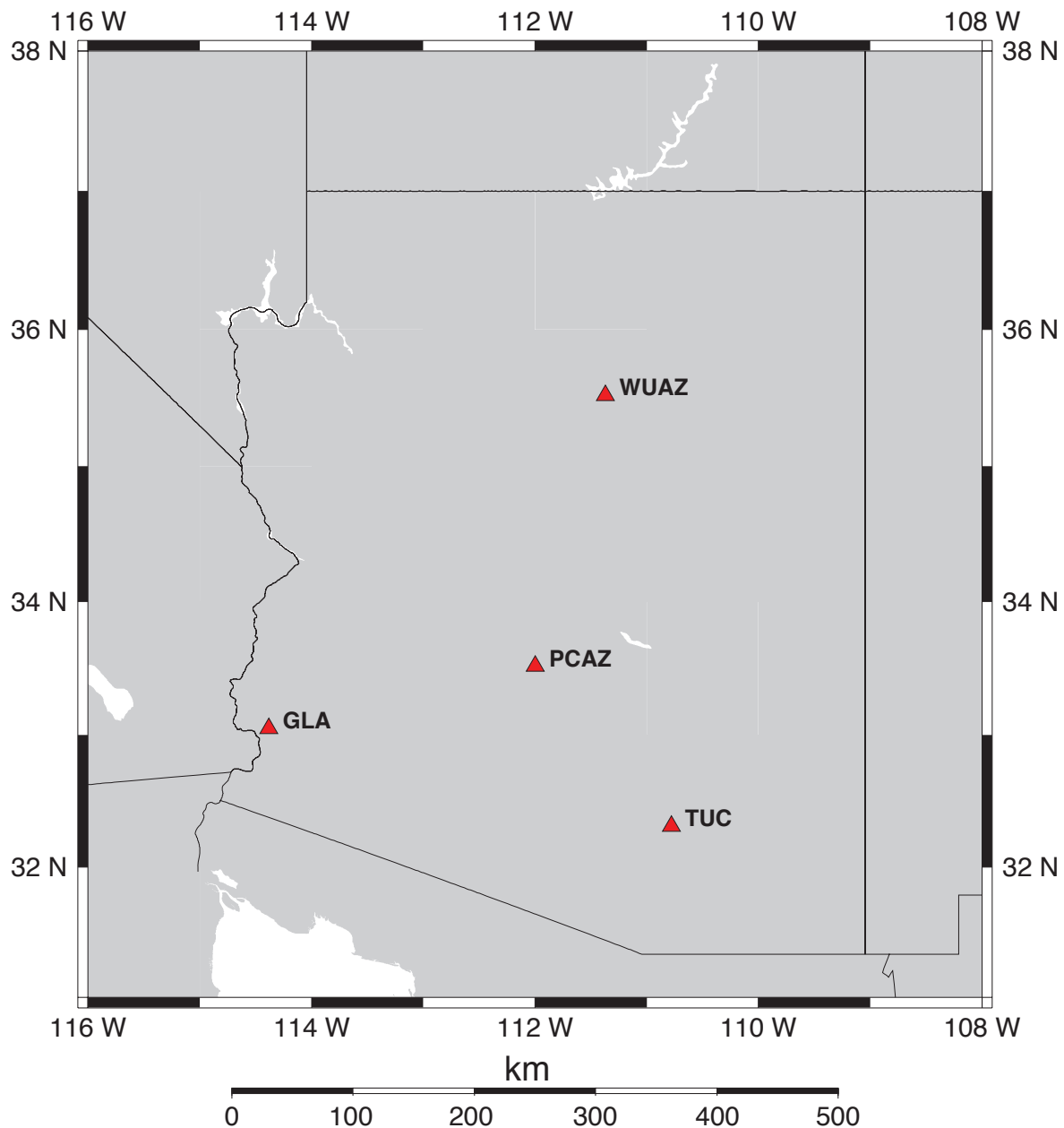


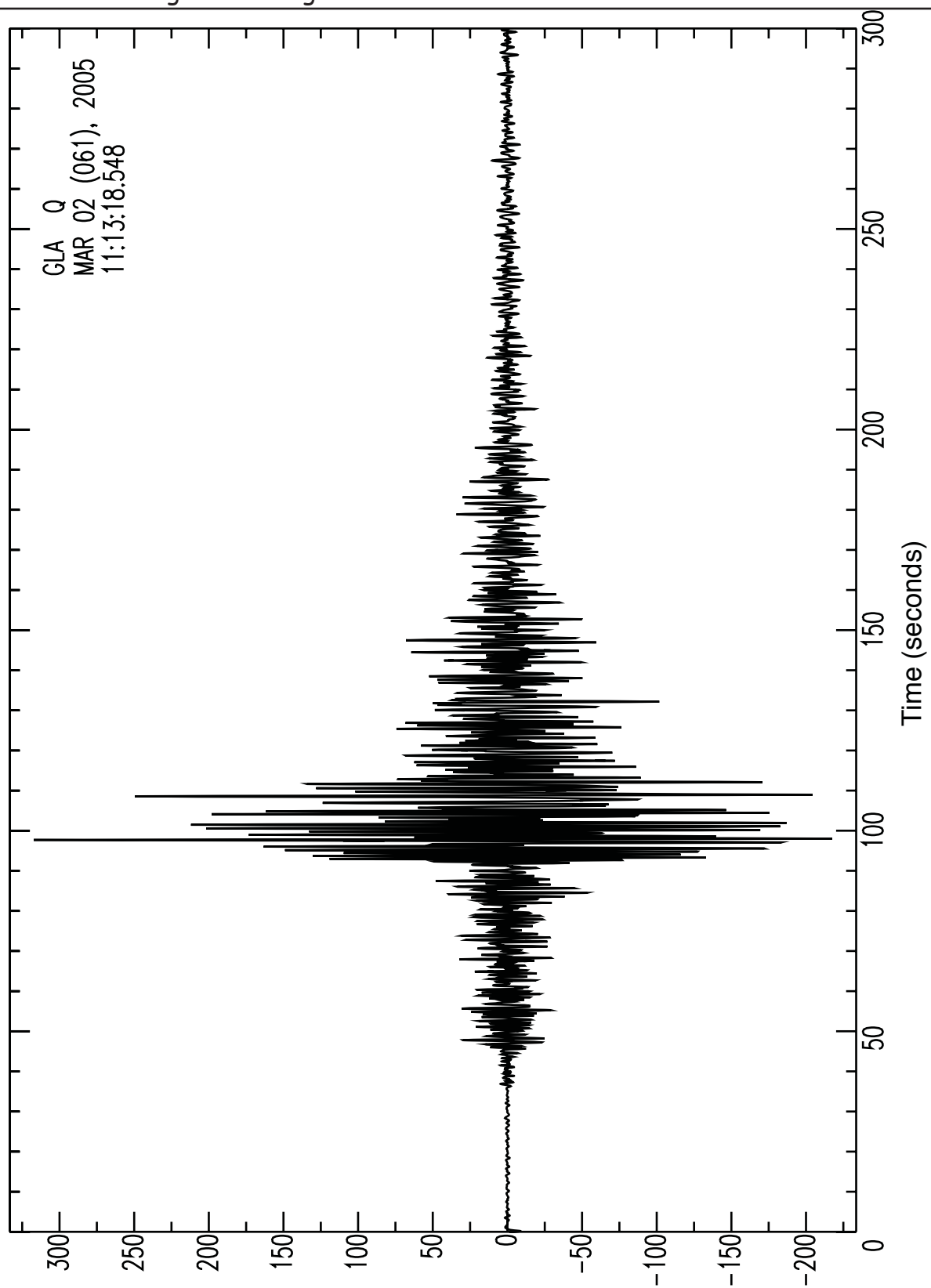
Table 1 - Calculations

Station Code	P Arrival Time (s)	S Arrival Time (s)	S-P (s)	Distance (km) [(S-P) x 8]

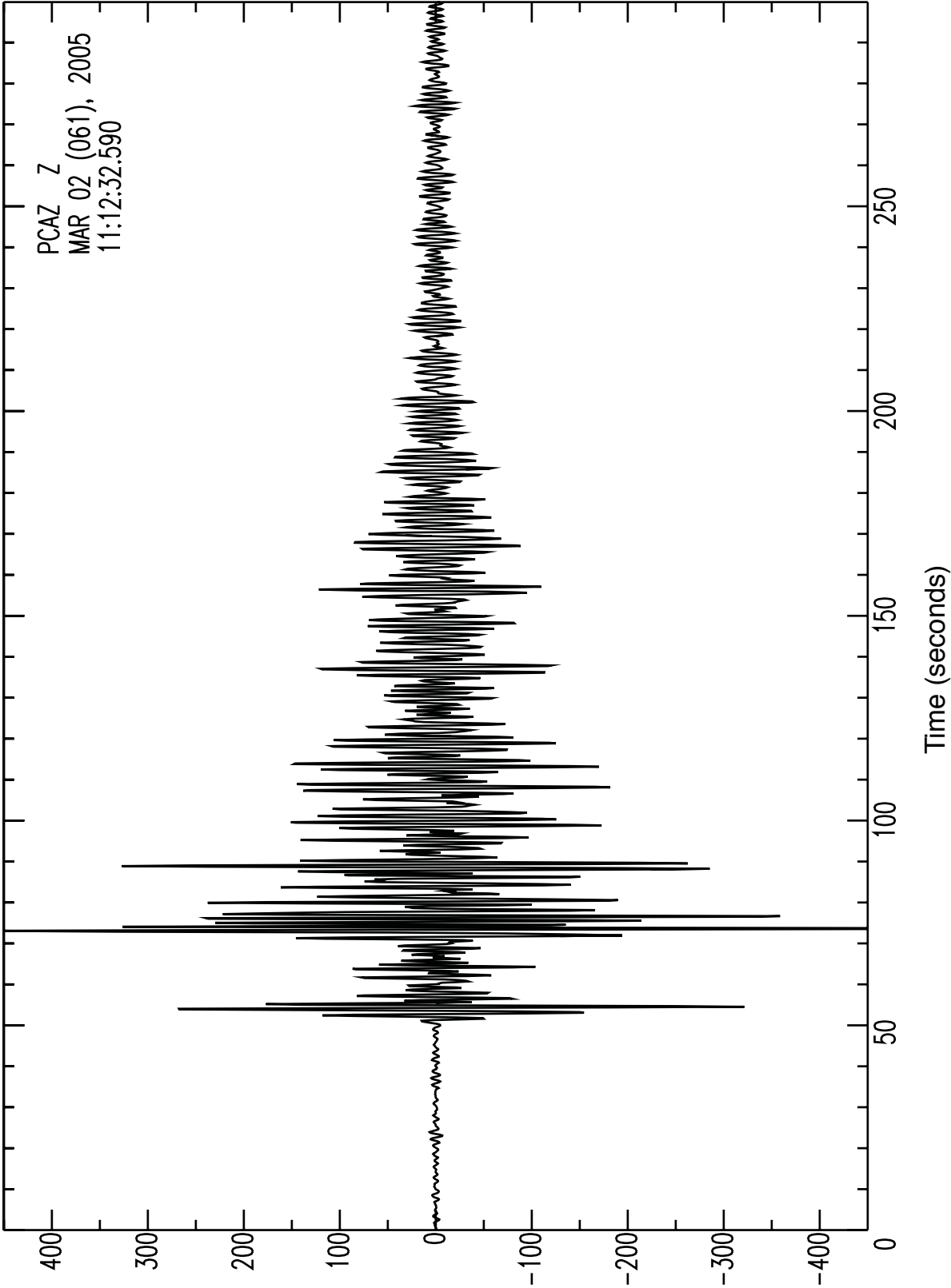
Map 1 - Event Location

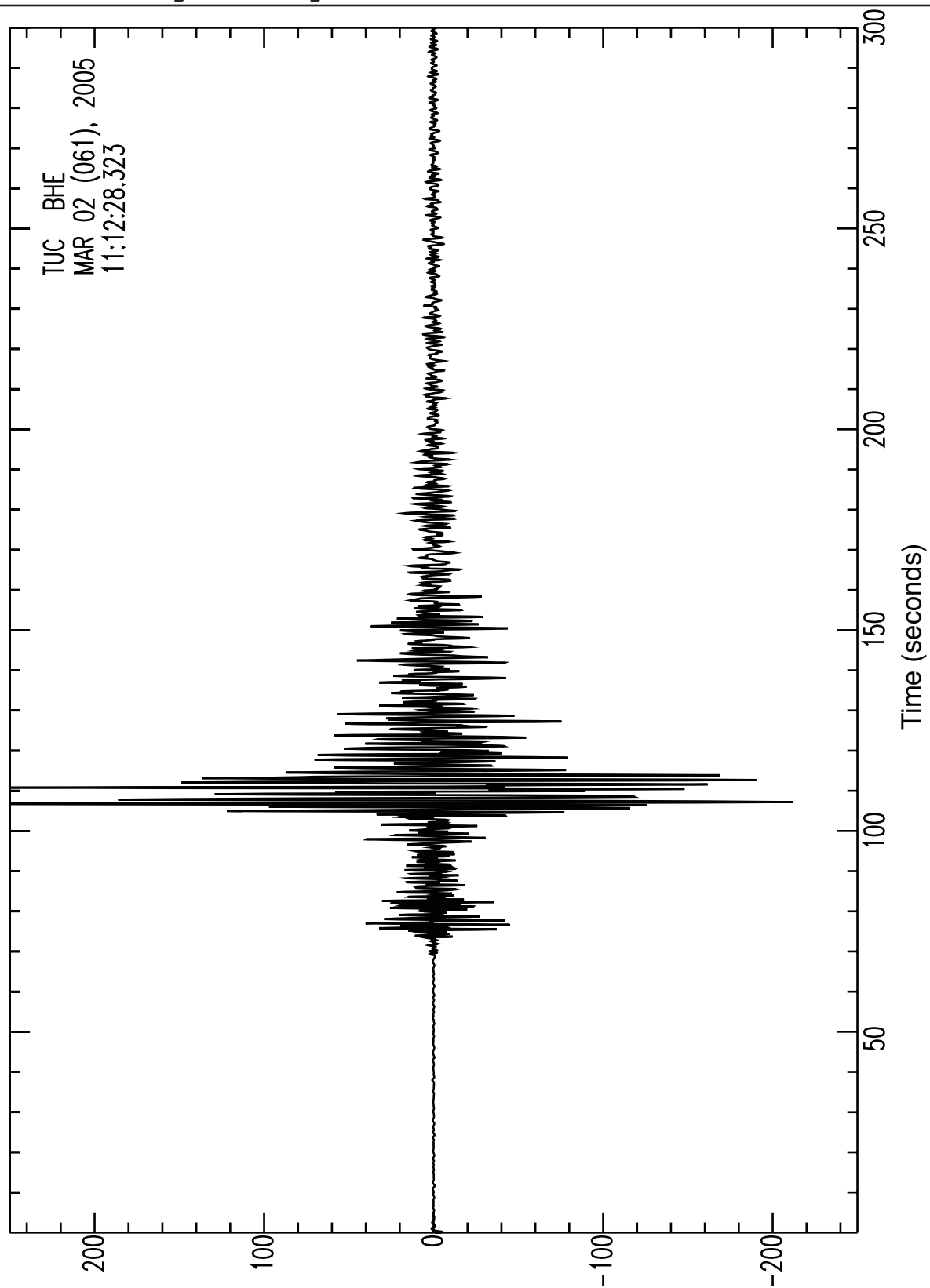
Latitude \_\_\_\_\_ Longitude \_\_\_\_\_

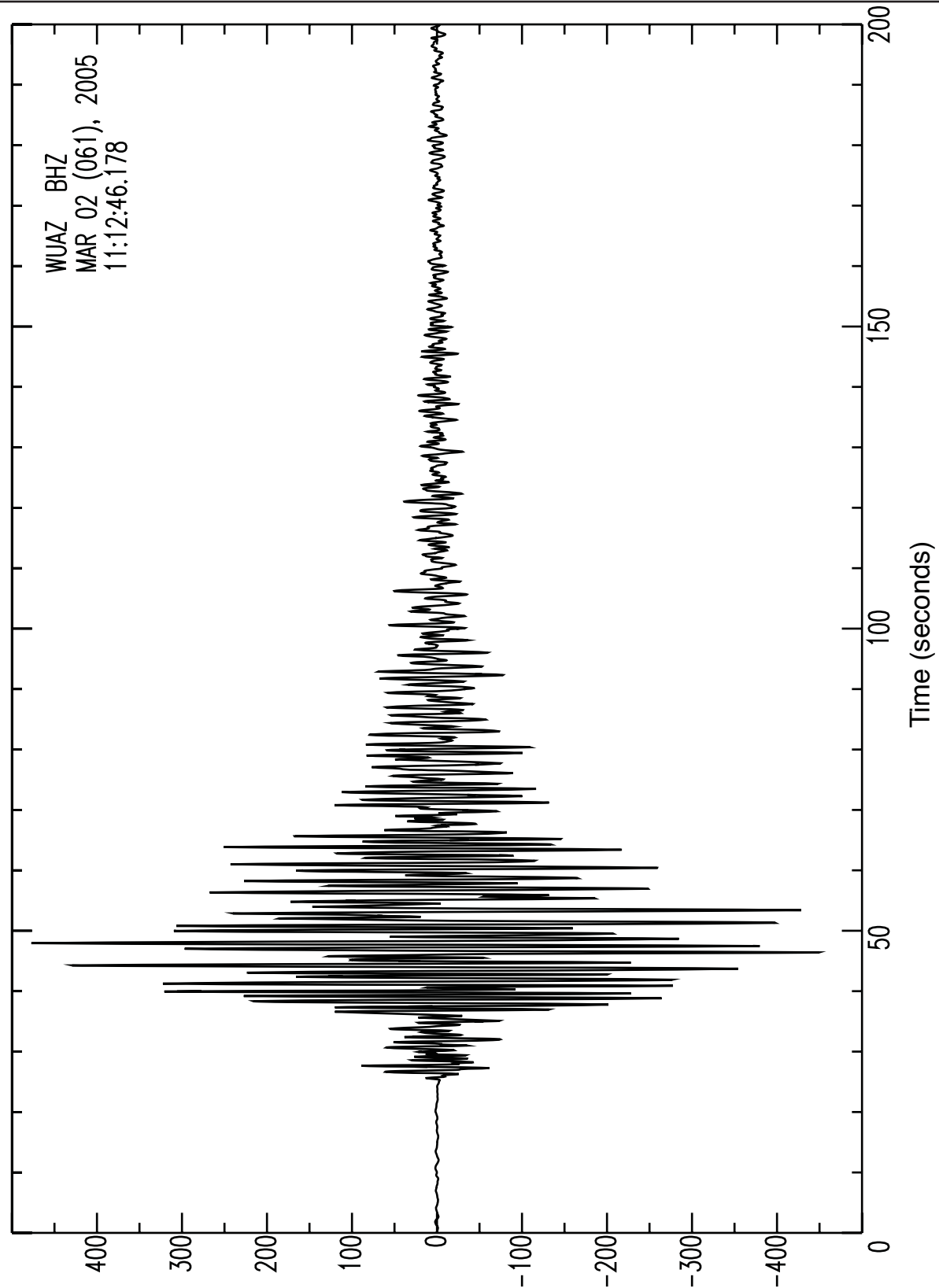












**Limited Use Copyright Statement**

Science Education Solutions will allow others to copy and distribute these materials provided that Science Education Solutions is given credit and provided that the resources remain free to others. Modifications are also allowed, as long as the final product is shared under these same copyright conditions.